

Key stage 3 mathematics 2009

Mental mathematics Test C

First name \_\_\_\_\_

Last name \_\_\_\_\_

School \_\_\_\_\_

Total marks

Practice question

		24	
--	--	----	--

Time: 5 seconds

<b>1</b>			<input type="text"/>
----------	--	--	----------------------

<b>2</b>	minutes		<input type="text"/>
----------	---------	--	----------------------

<b>3</b>	£	£26.58		<input type="text"/>
----------	---	--------	--	----------------------

<b>4</b>		63		<input type="text"/>
----------	--	----	--	----------------------

<b>5</b>		206		<input type="text"/>
----------	--	-----	--	----------------------



<b>6</b>			<input type="text"/>
----------	--	--	----------------------

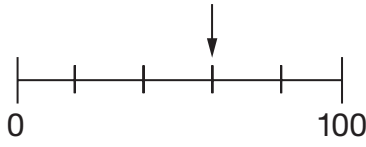
<b>7</b>		$b$		<input type="text"/>
----------	--	-----	--	----------------------

Time: 5 seconds continued

<b>8</b>		-3		<input type="text"/>
----------	--	----	--	----------------------

Time: 10 seconds

<b>9</b>	Silver			<input type="text"/>
	Red			

<b>10</b>			<input type="text"/>
-----------	---	--	----------------------

<b>11</b>	6.45 pm	45 minutes		<input type="text"/>
	pm			

<b>12</b>	2.3	2.5	2.7		<input type="text"/>
	_____, _____				

		9343		<input type="text"/>
--	--	------	--	----------------------

<b>14</b>	16, 12, 8, 4		<input type="text"/>
	_____, _____		

		$a - b = 14$		<input type="text"/>
--	--	--------------	--	----------------------

		2.6 0.8		<input type="text"/>
--	--	---------	--	----------------------

**Time: 10 seconds continued**

17

Off  
Spin Wash  
Rinse

17

18

No  
Yes

people

18

19

	$8pq$
--	-------

19

20

cm	8cm
----	-----

20

21

£	£50
---	-----

21

**Time: 15 seconds**

22

in →  $\times 4$  →  $+ 6$  → out

22

23

	2009
--	------

23

24

magazines	25%
food	40%
clothes	
	%

24

**Time: 15 seconds continued**

25

Poetry	4
Reference	6
Story	11

25

26

\_\_\_\_\_ cm<sup>2</sup>

26

27

27

28

rectangle	rhombus
parallelogram	
square	trapezium

28

29

$4.3 \times 6 = 25.8$

29

30

21	23	25	27
----	----	----	----

30